

## Y9 BT & BGT WORKSHEET 2

Instruction: Please do attempt this at the back of your exercise book.

### QUESTION 2 PART 1 - MATCHING [5 marks]

Match the descriptions in List A with the correct terms in List B. Write the letter representing the term in the box beside the matching description.

#### List A

- Collecting information
- Longest side of a triangle
- Reduces pollution
- Hold up cylindrical work
- Durable and flexible material
- Holding the timber while sawing
- Closed symmetrical curve
- Plane figure bounded by several lines
- Hold wooden parts together
- Turning set screws and nuts

#### List B

- (a) polygon
- (b) leather
- (c) safety
- (d) nails
- (e) hypotenuse
- (f) spanners
- (g) recycling
- (h) Investigation
- (i) bench hook
- (j) ellipse
- (k) V block

Name: \_\_\_\_\_

Year Level: \_\_\_\_\_

### PART 2 - MATCHING [5 marks]

The faces on the isometric view of a given shaped block are indicated by letters in **Figure 1**.

Write the correct letters in the circles in **Figure 2** to match their corresponding faces in **Figure 1**.

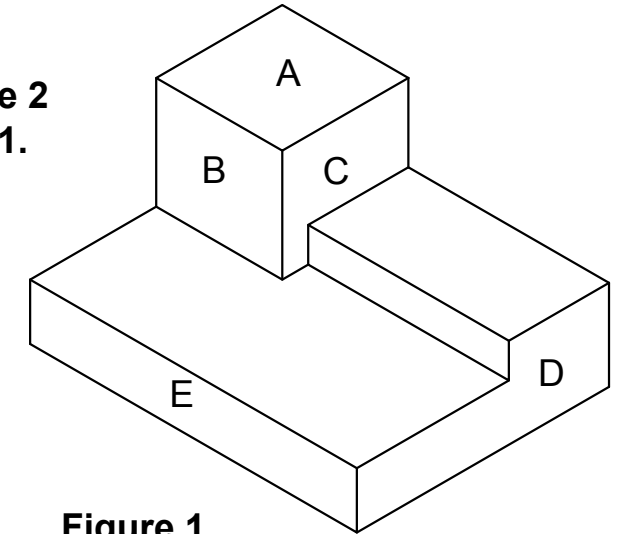


Figure 1

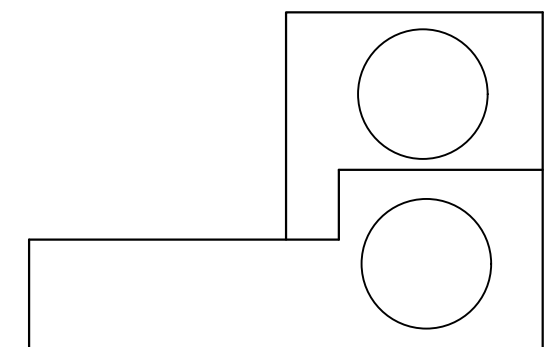
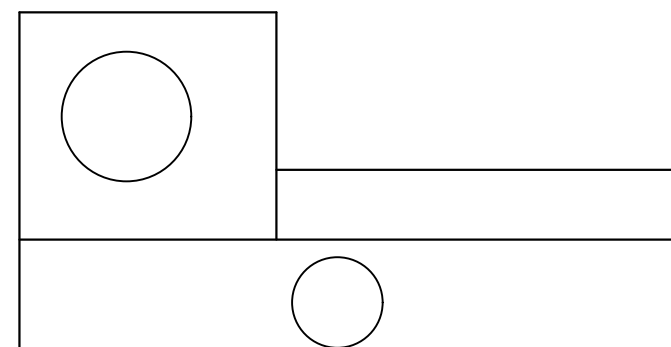
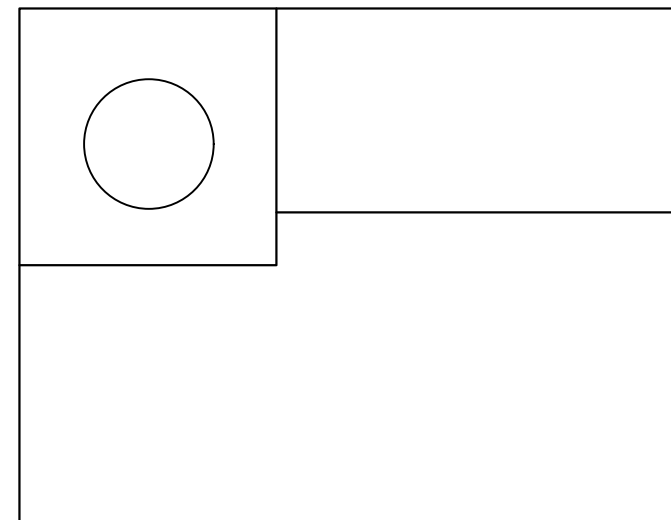


Figure 2